

Name _____



TEKS Number and
Operations—K.3.B
Also K.3.C

MATHEMATICAL PROCESSES
K.1.D

13.4

ALGEBRA


Sums Up to 10



Essential Question

How can you show and write addition sentences for sums up to 10?

Explore







DIRECTIONS Listen to the addition word problem. Write the numbers to complete the addition sentence. Trace the symbols.

Share and Show

1









2







3








DIRECTIONS 1–3. Listen to the addition word problem. Complete the addition sentence.

450 four hundred fifty

Name _____

4







5







6







DIRECTIONS 4–6. Listen to the addition word problem. Complete the addition sentence.



HOME ACTIVITY • Have your child tell you an addition sentence with a sum of ten.



Problem Solving



7



_____		_____		_____
-----	+	-----	=	-----
_____		_____		_____

Daily Assessment Task

8



○ $4 + 6 = 10$

○ $5 + 5 = 10$


DIRECTIONS 7. There are ten children in the cafeteria. Ten of them are drinking water. How many children are drinking milk? Draw counters to show the children drinking milk. Complete the addition sentence. 8. Choose the correct answer. Nate has 4 dolls. Ollie has 6 dolls. What does the picture show?



Name _____


13.4 Sums Up to 10

ALGEBRA














DIRECTIONS Listen to the addition problem. Complete the addition sentence. **1.** Kim has five basketballs. She also has 4 soccer balls. How many balls does she have in all? **2.** The team put seven hats on the rack. They also put three gloves on the rack. How many hats and gloves are on the rack?

3



- $6 + 4 = 10$
- $8 + 2 = 10$

4



- $3 + 7 = 10$
- $4 + 5 = 10$

DIRECTIONS Choose the correct answer.
 What does the picture show? **3.** There are eight blue birds sitting on a fence. There are two red birds on the fence. **4.** There are three yellow kittens at the Cat Show. There are seven black kittens at the Cat Show.